



Name: _____
Mr. Tiénou-Gustafson & Mr. Bielmeier
Geometry, Period _____
Due Date: Tue, 17 Mar 2015

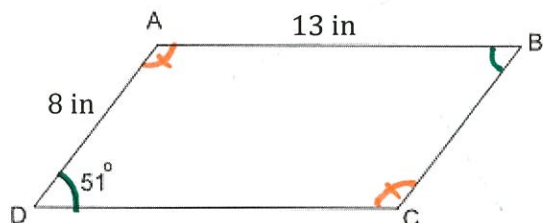
HW120-ParallelogramExploration2

**Geometry
Homework**

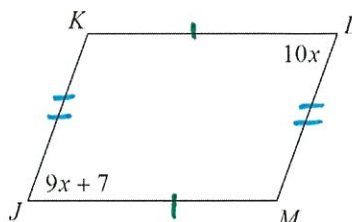
Part 1: Complete all class work (if not completed in class)

Part 2: Label everything you know about parallelograms (angles & sides) on every diagram.

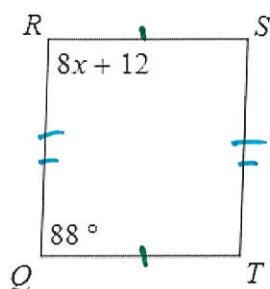
1: ABCD is a parallelogram. After labeling everything you know, give the measure of each angle AND side.



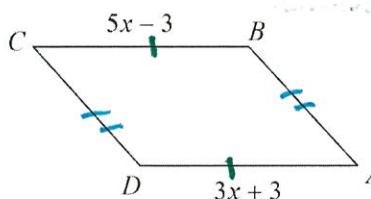
2. Find $m\angle M$ *Solve for x first*



3. Solve for x.



4. Find CB



Name: _____
Mr. Tiénou-Gustafson & Mr. Bielmeier
Geometry, Period _____
Due Date: Tue, 17 Mar 2015

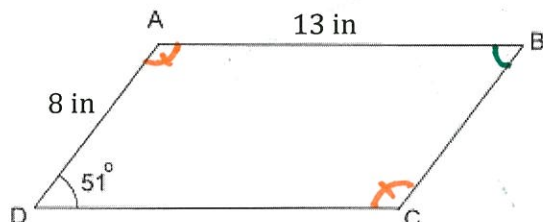
HW120-ParallelogramExploration2

**Geometry
Homework**

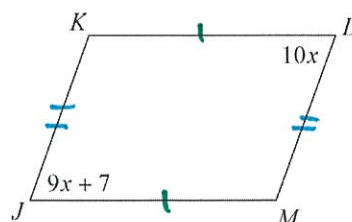
Part 1: Complete all class work (if not completed in class)

Part 2: Label everything you know about parallelograms (angles & sides) on every diagram.

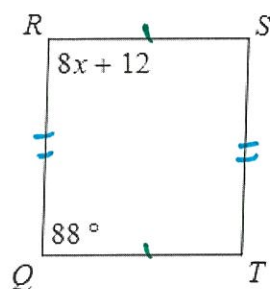
1: ABCD is a parallelogram. After labeling everything you know, give the measure of each angle AND side.



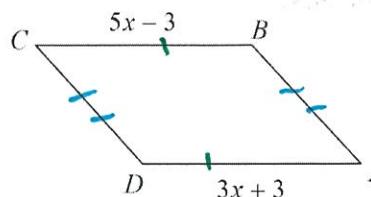
2. Find $m\angle M$ *Solve for x first*



3. Solve for x.

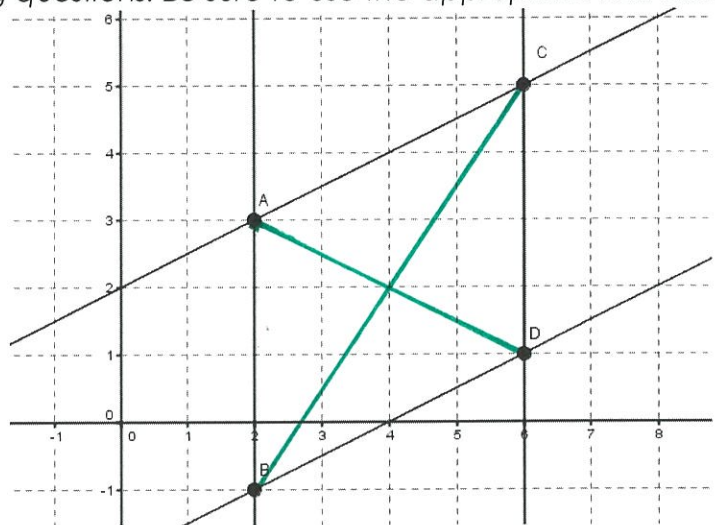


4. Find CB



Part 3: Carefully read and answer the following questions. Be sure to use the appropriate formulas! Use the figure below to answer the questions.

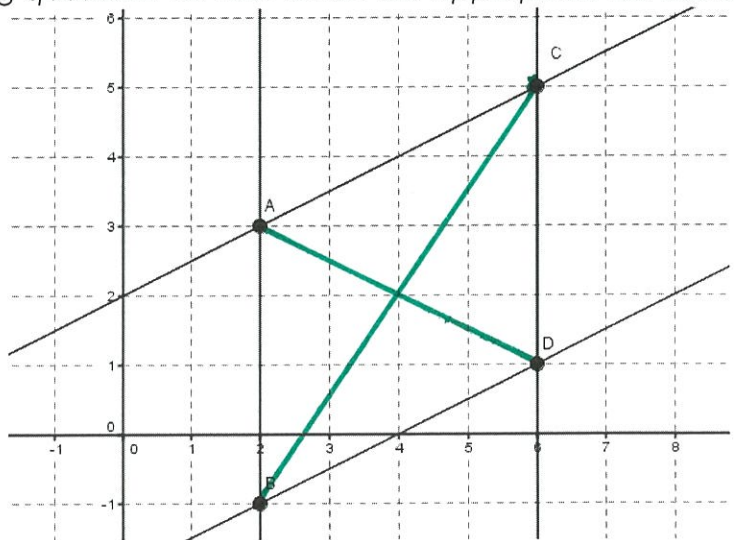
- a. Draw a diagonal line from point C to point B. Draw another diagonal line from point A to point D. Mark the point of intersection as point E.



- b. Find the lengths of \overline{AD} , \overline{AE} , and \overline{ED} . In a complete sentence, describe what you notice about the lengths of segments AE and ED.
use distance formula
- c. What prediction can you make about the lengths of \overline{BC} , \overline{BE} , and \overline{EC} .
- d. Find the lengths of segments BC, BE, and EC and compare the answers to your predictions.
- e. What conclusion can you come to about the diagonals of a parallelogram?

Part 3: Carefully read and answer the following questions. Be sure to use the appropriate formulas! Use the figure below to answer the questions.

- a. Draw a diagonal line from point C to point B. Draw another diagonal line from point A to point D. Mark the point of intersection as point E.



- b. Find the lengths of \overline{AD} , \overline{AE} , and \overline{ED} . In a complete sentence, describe what you notice about the lengths of segments AE and ED.
use distance formula
- c. What prediction can you make about the lengths of \overline{BC} , \overline{BE} , and \overline{EC} .
- d. Find the lengths of segments BC, BE, and EC and compare the answers to your predictions.
- e. What conclusion can you come to about the diagonals of a parallelogram?